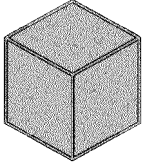

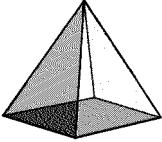



Time: 10 Minutes	Paper Math 3	Total Marks: 10
-------------------------	---------------------	------------------------

6th Month, 2nd Week, 3rd Day	Syllabus: Unit 6. Exercise # 4. Q # 1.
------------------------------	---

Q.1. Write the required information in the following table. (10)

درج ذیل خانوں میں مطلوبہ معلومات لکھیں۔

Shape	Name	No. of faces	No. of edges	No. of vertices
				
				
				
				

Time: 10 Minutes	Paper Math 3	Total Marks: 10
-------------------------	---------------------	------------------------

6th Month, 2nd Week, 3rd Day	Syllabus: Unit 6. Exercise # 4. Q # 1.
------------------------------	---

Q.1. Write the required information in the following table. (10)

درج ذیل خانوں میں مطلوبہ معلومات لکھیں۔

Shape	Name	No. of faces	No. of edges	No. of vertices
